

Baltic Way 2012

Tartu, Estonia



Problems and Solutions

The 20 contest problems were submitted by 7 countries:

Denmark (5)

Estonia (1)

Finland (2)

Latvia (2)

Norway (2)

Poland (3)

Russia (St. Petersburg) (5)

Some extra solutions originate from graded contest papers (2.1 – St. Petersburg, 4.3 – St. Petersburg/Sweden, 4.4 – Poland, 6.2 – Germany), two solutions (11.3 and 14.2) have been added on ground of Kai Neergård's web post (<http://www.artofproblemsolving.com/Forum/viewtopic.php?p=2847268#p2847268>), some solutions have been added by coordinators (2.3 – Martin Pettai, 2.4-2.6 – Indrek Zolk).

Problems

Problem 1 –SPB–

The numbers from 1 to 360 are partitioned into 9 subsets of consecutive integers and the sums of the numbers in each subset are arranged in the cells of a 3×3 square. Is it possible that the square turns out to be a magic square?

Remark: A magic square is a square in which the sums of the numbers in each row, in each column and in both diagonals are all equal.

Problem 2 –FIN–

Let a, b, c be real numbers. Prove that

$$ab + bc + ca + \max\{|a - b|, |b - c|, |c - a|\} \leq 1 + \frac{1}{3}(a + b + c)^2.$$

Problem 3 –DEN–

a) Show that the equation

$$\lfloor x \rfloor (x^2 + 1) = x^3, \tag{1}$$

where $\lfloor x \rfloor$ denotes the largest integer not larger than x , has exactly one real solution in each interval between consecutive positive integers.

b) Show that none of the positive real solutions of this equation is rational.

Problem 4 –POL–

Prove that for infinitely many pairs (a, b) of integers the equation

$$x^{2012} = ax + b$$

has among its solutions two distinct real numbers whose product is 1.

Problem 5 –EST–

Find all functions $f: \mathbb{R} \rightarrow \mathbb{R}$ for which

$$f(x + y) = f(x - y) + f(f(1 - xy))$$

holds for all real numbers x and y .

Problem 6 –SPB–

There are 2012 lamps arranged on a table. Two persons play the following game. In each move the player flips the switch of one lamp, but he must never get back an arrangement of the lit lamps that has already been on the table. A player who cannot move loses. Which player has a winning strategy?

Problem 7 –SPB–

On a 2012×2012 board, some cells on the top-right to bottom-left diagonal are marked. None of the marked cells is in a corner. Integers are written in each cell of this board in the following way. All the numbers in the cells along the upper and the left sides of the board are 1's. All the numbers in the marked cells are 0's. Each of the other cells contains a number that is equal to the sum of its upper neighbour and its left neighbour. Prove that the number in the bottom right corner is not divisible by 2011.

Problem 8 –SPB–

A directed graph does not contain directed cycles. The number of edges in any directed path does not exceed 99. Prove that it is possible to colour the edges of the graph in 2 colours so that the number of edges in any single-coloured directed path in the graph will not exceed 9.

Problem 9 –DEN–

Zeros are written in all cells of a 5×5 board. We can take an arbitrary cell and increase by 1 the number in this cell and all cells having a common side with it. Is it possible to obtain the number 2012 in all cells simultaneously?

Problem 10 –DEN–

Two players A and B play the following game. Before the game starts, A chooses 1000 not necessarily different odd primes, and then B chooses half of them and writes them on a blackboard. In each turn a player chooses a positive integer n , erases some primes p_1, p_2, \dots, p_n from the blackboard and writes all the prime factors of $p_1 p_2 \dots p_n - 2$ instead (if a prime occurs several times in the prime factorization of $p_1 p_2 \dots p_n - 2$, it is written as many times as it occurs). Player A starts, and the player whose move leaves the blackboard empty loses the game. Prove that one of the two players has a winning strategy and determine who.

Remark: Since 1 has no prime factors, erasing a single 3 is a legal move.

Problem 11 –SPB–

Let ABC be a triangle with $\angle A = 60^\circ$. The point T lies inside the triangle in such a way that $\angle ATB = \angle BTC = \angle CTA = 120^\circ$. Let M be the midpoint of BC . Prove that $TA + TB + TC = 2AM$.

Problem 12 –DEN–

Let $P_0, P_1, \dots, P_8 = P_0$ be successive points on a circle and Q be a point inside the polygon $P_0 P_1 \dots P_7$ such that $\angle P_{i-1} Q P_i = 45^\circ$ for $i = 1, \dots, 8$. Prove that the sum

$$\sum_{i=1}^8 P_{i-1} P_i^2$$

is minimal if and only if Q is the centre of the circle.

Problem 13 –NOR–

Let ABC be an acute triangle, and let H be its orthocentre. Denote by H_A , H_B and H_C the second intersection of the circumcircle with the altitudes from A , B and C respectively. Prove that the area of $\triangle H_A H_B H_C$ does not exceed the area of $\triangle ABC$.

Problem 14 –POL–

Given a triangle ABC , let its incircle touch the sides BC , CA , AB at D , E , F , respectively. Let G be the midpoint of the segment DE . Prove that $\angle EFC = \angle GFD$.

Problem 15 –LAT–

The circumcentre O of a given cyclic quadrilateral $ABCD$ lies inside the quadrilateral but not on the diagonal AC . The diagonals of the quadrilateral intersect at I . The circumcircle of the triangle AOI meets the sides AD and AB at points P and Q , respectively; the circumcircle of the triangle COI meets the sides CB and CD at points R and S , respectively. Prove that $PQRS$ is a parallelogram.

Problem 16 –FIN–

Let n , m and k be positive integers satisfying $(n-1)n(n+1) = m^k$. Prove that $k = 1$.

Problem 17 –DEN–

Let $d(n)$ denote the number of positive divisors of n . Find all triples (n, k, p) , where n and k are positive integers and p is a prime number, such that

$$n^{d(n)} - 1 = p^k.$$

Problem 18 –NOR–

Find all triples (a, b, c) of integers satisfying $a^2 + b^2 + c^2 = 20122012$.

Problem 19 –POL–

Show that $n^n + (n+1)^{n+1}$ is composite for infinitely many positive integers n .

Problem 20 –LAT–

Find all integer solutions of the equation $2x^6 + y^7 = 11$.

Problems and Solutions

Problem 1 –SPB–

The numbers from 1 to 360 are partitioned into 9 subsets of consecutive integers and the sums of the numbers in each subset are arranged in the cells of a 3×3 square. Is it possible that the square turns out to be a magic square?

Remark: A magic square is a square in which the sums of the numbers in each row, in each column and in both diagonals are all equal.

Answer: Yes.

Solution 1. If the numbers a_1, a_2, \dots, a_9 form a 3×3 magic square, then the numbers $a_1 + d, a_2 + d, \dots, a_9 + d$ form a 3×3 magic square, too. Hence it is sufficient to divide all the numbers into parts with equal numbers of elements: i.e. from $40k + 1$ to $40(k + 1)$, $k = 0, 1, \dots, 8$. Then we need to arrange the least numbers of these parts (i.e. the numbers 1, 41, 81, \dots , 321) in the form of a magic square (we omit here an example, it is similar to the magic square with numbers 1, 2, \dots , 9). After that all other numbers $1 + s, 41 + s, \dots, 321 + s$ will also form a magic square ($s = 1, \dots, 39$), and so do the whole sums.

Solution 2. Distribute the numbers into nine parts $40k + 1, 40k + 2, \dots, 40k + 40$, $k = 0, 2, \dots, 8$. Note that the sums of these parts form an arithmetic progression: the sums are $(40k + 1 + 40k + 40) \cdot 20 = 1600k + 820$, $k = 0, 1, \dots, 8$. It remains to construct a magic square of the numbers of the progression 820, 2420, \dots , 13620 as follows. Start from an initial magic square with 0, 1, \dots , 8 (or similar), multiply all members by 1600 (this is again a magic square) and add 820 to every member (again a magic square).

Problem 2 –FIN–

Let a, b, c be real numbers. Prove that

$$ab + bc + ca + \max\{|a - b|, |b - c|, |c - a|\} \leq 1 + \frac{1}{3}(a + b + c)^2.$$

Solution 1. We may assume $a \leq b \leq c$, whence $\max\{|a - b|, |b - c|, |c - a|\} = c - a$. The initial inequality is equivalent to

$$c - a \leq 1 + \frac{1}{3}(a^2 + b^2 + c^2 - ab - bc - ac)$$

which in turn is equivalent to

$$c - a \leq 1 + \frac{1}{6}((a - c)^2 + (b - c)^2 + (a - b)^2).$$

Since $\sqrt{\frac{(c-b)^2 + (b-a)^2}{2}} \geq \frac{c-a}{2}$, we have

$$(a - c)^2 + (b - c)^2 + (a - b)^2 \geq \frac{3}{2}(c - a)^2$$

and hence

$$1 + \frac{1}{6} \left((a-c)^2 + (b-c)^2 + (a-b)^2 \right) \geq 1 + \frac{1}{4} (c-a)^2 \geq c-a$$

as desired.

Solution 2. Assume $a \leq b \leq c$. By the well-known inequality $xy + yz + zx \leq x^2 + y^2 + z^2$ (it can be shown by $2xy \leq x^2 + y^2$, etc., and adding all three such inequalities) we have

$$\begin{aligned} ab + bc + ca - a + c - 1 &= (a+1)b + b(c-1) + (a+1)(c-1) \leq (a+1)^2 + b^2 + (c-1)^2 \\ &= a^2 + b^2 + c^2 + 2(a-c+1) = (a+b+c)^2 - 2(ab+bc+ca+c-a-1) \end{aligned} \quad (2)$$

or

$$ab + bc + ca + c - a \leq 1 + \frac{1}{3}(a+b+c)^2.$$

Solution 3. Assume $a \leq b \leq c$ and take $c = a + x$, $b = a + y$, where $x \geq y \geq 0$. The inequality $3(ab + bc + ca + c - a - 1) \leq (a + b + c)^2$ then reduces to

$$x^2 - xy + y^2 + 3 \geq 3x.$$

The latter inequality is equivalent to the inequality

$$\left(\frac{x}{2} - y \right)^2 + \frac{3}{4}x^2 - 3x + 3 \geq 0$$

which in turn is equivalent to the inequality

$$\frac{4}{3} \left(\frac{x}{2} - y \right)^2 + (x-2)^2 \geq 0.$$

Remark 1. The inequality $x^2 - 3x - xy + y^2 + 3 \geq 0$ can also be proven by noticing that the discriminant of the LHS, $(y+3)^2 - 4(y^2+3) = -3(y-1)^2$, is non-positive. Since the quadratic polynomial in x has positive leading coefficient, its all values are non-negative.

Remark 2. Another way to prove the inequality $x^2 - 3x - xy + y^2 + 3 \geq 0$ is, by AM-GM, the following:

$$\begin{aligned} 3x + xy &= \sqrt{\left(\sqrt{2}x \right)^2 \left(\frac{3}{\sqrt{2}} + \frac{y}{\sqrt{2}} \right)^2} \leq \frac{\left(\sqrt{2}x \right)^2 + \left(\frac{3}{\sqrt{2}} + \frac{y}{\sqrt{2}} \right)^2}{2} \\ &= x^2 + \frac{9}{4} + \frac{3}{2}y + \frac{y^2}{4} = 3 + x^2 + y^2 - \frac{3}{4}(y-1)^2 \leq 3 + x^2 + y^2. \end{aligned}$$

Solution 4. Assume $a \leq b \leq c$ and take $a = b - k$, $c = b + l$, where $k, l \geq 0$. The inequality $3(ab + bc + ca + c - a - 1) \leq (a + b + c)^2$ then reduces to

$$k^2 + l^2 + kl - 3l - 3k + 3 \geq 0.$$

This is equivalent to

$$(k-1)^2 + (l-1)^2 + (k-1)(l-1) \geq 0,$$

which holds, since $x^2 + y^2 + xy \geq 0$ for all real numbers x, y .

Remark. The inequality $k^2 + l^2 + kl - 3l - 3k + 3 \geq 0$ can also be proven by separating perfect squares as

$$\frac{1}{4}(k-l)^2 + \frac{3}{4}(k+l)^2 - 3 \cdot (k+l) + 3 \geq 0$$

which is in turn similar to

$$(k-l)^2 + 3(k+l-2)^2 \geq 0.$$

Solution 5. Assume $a \leq b \leq c$. Expand the inequality $3(ab+bc+ca+c-a-1) \leq (a+b+c)^2$ fully to obtain $a^2 + b^2 + c^2 - ab - ac - bc + 3a - 3c + 3 \geq 0$. Now fix $\alpha \in \mathbb{R}$ and consider the set

$$\gamma = \{(a, b, c): a^2 + b^2 + c^2 - ab - ac - bc + 3a - 3c + 3 + \alpha = 0\}.$$

Note that γ is a quadric. Its invariants are

$$\delta = \begin{vmatrix} 1 & -\frac{1}{2} & -\frac{1}{2} \\ -\frac{1}{2} & 1 & -\frac{1}{2} \\ -\frac{1}{2} & -\frac{1}{2} & 1 \end{vmatrix} = 0, \quad \Delta = \begin{vmatrix} 1 & -\frac{1}{2} & -\frac{1}{2} & \frac{3}{2} \\ -\frac{1}{2} & 1 & -\frac{1}{2} & 0 \\ -\frac{1}{2} & -\frac{1}{2} & 1 & -\frac{3}{2} \\ \frac{3}{2} & 0 & -\frac{3}{2} & 3 + \alpha \end{vmatrix} = 0, \quad S = 3 \cdot \begin{vmatrix} 1 & -\frac{1}{2} \\ -\frac{1}{2} & 1 \end{vmatrix} = \frac{9}{4},$$

and

$$K = \begin{vmatrix} 1 & -\frac{1}{2} & \frac{3}{2} \\ -\frac{1}{2} & 1 & 0 \\ \frac{3}{2} & 0 & 3 + \alpha \end{vmatrix} + \begin{vmatrix} 1 & -\frac{1}{2} & \frac{3}{2} \\ -\frac{1}{2} & 1 & -\frac{3}{2} \\ \frac{3}{2} & -\frac{3}{2} & 3 + \alpha \end{vmatrix} + \begin{vmatrix} 1 & -\frac{1}{2} & 0 \\ -\frac{1}{2} & 1 & -\frac{3}{2} \\ 0 & -\frac{3}{2} & 3 + \alpha \end{vmatrix} = \frac{9\alpha}{4}.$$

In the case $\alpha > 0$, it is known from the theory of quadrics that the surface γ is an imaginary elliptic cylinder ($\delta = \Delta = 0$, $S > 0$, and $K > 0$) and therefore contains no real points. Hence the condition $a^2 + b^2 + c^2 - ab - ac - bc + 3a - 3c + 3 + \alpha = 0$ implies that $\alpha \leq 0$, therefore

$$a^2 + b^2 + c^2 - ab - ac - bc + 3a - 3c + 3 = -\alpha \geq 0,$$

as desired.

Solution 6. We start as in Solution 5: construct the quadric

$$\gamma = \{(a, b, c): a^2 + b^2 + c^2 - ab - ac - bc + 3a - 3c + 3 + \alpha = 0\}.$$

Now note that the substitution

$$\begin{cases} a = 2x - y + 2z, \\ b = 2y + 2z, \\ c = -2x - y + 2z \end{cases}$$

gives (in the new coordinate system)

$$\gamma = \{(x, y, z): 12x^2 + 9y^2 + 12x + 3 + \alpha = 0\}.$$

(The columns of the coefficient matrix $C = \begin{pmatrix} 2 & -1 & 2 \\ 0 & 2 & 2 \\ -2 & -1 & 2 \end{pmatrix}$ of the substitution are in fact the orthogonalized eigenvectors of $\begin{pmatrix} 1 & -\frac{1}{2} & -\frac{1}{2} \\ -\frac{1}{2} & 1 & -\frac{1}{2} \\ -\frac{1}{2} & -\frac{1}{2} & 1 \end{pmatrix}$.) Since

$$12x^2 + 9y^2 + 12x + 3 + \alpha = 3(2x + 1)^2 + 9y^2 + \alpha,$$

it is clear that in the case $\alpha > 0$, the set γ is void.

Remark 1. Solutions 5 and 6 are presented here for instructive purposes only.

Remark 2. Solutions 3, 4, and 6 suggest also general substitutions in the initial equation that directly leave the inequality in the form of sum of squares. Let these substitutions be mentioned here.

- Solution 3 suggests $T = \frac{a-2b+c}{2}$, $U = c - a - 2$, and reduces the original inequality to $\frac{4}{3}T^2 + U^2 \geq 0$;
- solution 4 together with its remark suggests $T = 2b - a - c$, $U = c - a - 2$, and reduces the original inequality to $T^2 + 3U^2 \geq 0$;
- solution 6 suggests $U = \frac{a-c}{2} + 1$, $T = \frac{-a+2b-c}{6}$, and reduces the original inequality to $3U^2 + 9T^2 \geq 0$.

Hence, up to scaling, all these three solutions are essentially the same.

Problem 3 –DEN–

a) Show that the equation

$$\lfloor x \rfloor (x^2 + 1) = x^3, \quad (3)$$

where $\lfloor x \rfloor$ denotes the largest integer not larger than x , has exactly one real solution in each interval between consecutive positive integers.

b) Show that none of the positive real solutions of this equation is rational.

Solution. a) Let $k = \lfloor x \rfloor$ and $y = x - k$. Then the equation becomes

$$k((k + y)^2 + 1) = (k + y)^3,$$

which reduces to

$$y(k + y)^2 = k.$$

The function $f(y) = y(k + y)^2$ is strictly increasing in $[0, 1]$ and continuous in the same interval. As $f(0) = 0 < k$ and $f(1) = (k + 1)^2 > k$, there exists exactly one $y_0 \in (0, 1)$ such that $f(y_0) = k$.

b) The equation (1) has no positive integral solutions. Assume that $x = k + y$ is rational and let $x = n/d$, where n and d are relatively prime positive integers. The given equation then becomes

$$\frac{k(n^2 + d^2)}{d^2} = \frac{n^3}{d^3},$$

or

$$dk(n^2 + d^2) = n^3.$$

Since x is not an integer, d has at least one prime divisor. It follows from the last equation that this prime divisor also divides n , a contradiction.

Remark. In a), one can also consider the function $g(y) = y(k + y)^2 - k$, perhaps expand it, and, using its derivative in $(0, 1)$, prove that g is strictly increasing in $[0, 1]$.

Problem 4 –POL–

Prove that for infinitely many pairs (a, b) of integers the equation

$$x^{2012} = ax + b$$

has among its solutions two distinct real numbers whose product is 1.

Solution 1. Observe first that for any integer $m > 2$ the quadratic polynomial $x^2 - mx + 1$ has two distinct positive roots whose product equals 1.

Moreover, for any integer $m > 2$ there exists a pair of integers (a_m, b_m) such that the polynomial $x^{2012} - a_mx - b_m$ is divisible by the polynomial $x^2 - mx + 1$. Indeed, dividing the monomial x^{2012} by the monic polynomial $x^2 - mx + 1$ we get a remainder $R_m(x)$ which is a polynomial with integer coefficients and degree at most 1. Thus $R_m(x) = a_mx + b_m$ for some integers a_m and b_m , which clearly meet our demand.

Now, for a fixed $m > 2$, any root of the polynomial $x^2 - mx + 1$ is also a root of the polynomial $x^{2012} - a_mx - b_m$. Therefore the set of solutions of the equation $x^{2012} = a_mx + b_m$ contains the two distinct roots of the polynomial $x^2 - mx + 1$, whose product is equal to 1. This means that the pair $(a, b) = (a_m, b_m)$ has the required property.

It remains to show that when m ranges over all integers greater than 2, we get infinitely many distinct pairs (a_m, b_m) . To this end, note that for $m_1 \neq m_2$ the roots of the polynomial $x^2 - m_1x + 1$ are distinct from the roots of the polynomial $x^2 - m_2x + 1$, since a common root of them would be a root of their difference $(m_2 - m_1)x$, and so it would be equal to zero, which is not a root of any $x^2 - mx + 1$. As the polynomial $x^{2012} - ax - b$ has at most 2012 distinct roots, it is divisible by $x^2 - mx + 1$ for at most 1006 values of m . Hence the same pair (a_m, b_m) can be obtained for at most 1006 values of m , which concludes the proof.

Solution 2. Observe first that for any integer $c > 2$ the equations $x = x - 0$ and $x^2 = cx - 1$ have two common distinct positive solutions whose product equals 1. Let those solutions be x_1 and x_2 .

Define a sequence (f_n) by $f_0 = 0$, $f_1 = 1$, and $f_{n+2} = cf_{n+1} - f_n$, $n \geq 0$. Suppose that x_1 and x_2 are also common solutions of the equations $x^n = f_nx - f_{n-1}$ and $x^{n+1} = f_{n+1}x - f_n$, then the following equalities hold for $x = x_1$ and $x = x_2$:

$$\begin{aligned} x^{n+2} - f_{n+2}x + f_{n+1} &= x^{n+2} - (cf_{n+1} - f_n)x + (cf_n - f_{n-1}) \\ &= x^{n+2} - c(f_{n+1}x - f_n) + (f_nx - f_{n-1}) = x^{n+2} - cx^{n+1} + x^n = x^n(x^2 - cx + 1) = 0, \end{aligned}$$

which shows that x_1 and x_2 are solutions of $x^{n+2} = f_{n+2}x - f_{n+1}$ as well.

Now note that for different integers c , all corresponding members of the sequences (f_n) are different. At first note that these sequences (f_n) are strictly increasing: by inductive argument we have

$$f_{n+2} - f_{n+1} = (c - 1)f_{n+1} - f_n > f_{n+1} - f_n > 0.$$

This also shows that all members are positive.

Now, let us have integers c and c' with $c' \geq c + 1 > 3$ and let the corresponding sequences be (f_n) and (f'_n) . Then again by induction

$$f'_{n+2} \geq (c + 1)f'_{n+1} - f'_n = cf'_{n+1} + (f'_{n+1} - f'_n) > cf'_{n+1} > cf_{n+1} > cf_{n+1} - f_n = f_{n+2}.$$

We have shown that for all integers $c > 2$, the respective pairs $(f_{2012}, -f_{2011})$ are different, as desired.

Solution 3. Consider any even integer $2c > 2$. The roots of $x^2 - 2cx + 1$ are $c \pm \sqrt{c^2 - 1}$ and their product is 1. Now consider the expansion

$$(c + \sqrt{c^2 - 1})^{2012} = \alpha + \beta\sqrt{c^2 - 1} = \beta \left(c + \sqrt{c^2 - 1} \right) + (\alpha - \beta c)$$

where α and β are some integers. Denote $a = \beta$ and $b = \alpha - \beta c$, then $c + \sqrt{c^2 - 1}$ is a solution of $x^{2012} = ax + b$.

Simple calculation shows that

$$(c - \sqrt{c^2 - 1})^{2012} = \alpha - \beta\sqrt{c^2 - 1} = \beta \left(c - \sqrt{c^2 - 1} \right) + (\alpha - \beta c),$$

yielding that also $c - \sqrt{c^2 - 1}$ is a solution of $x^{2012} = ax + b$.

To complete the proof, it remains to point out that $a = \beta \geq 2012 \cdot c^{2011}$ which means that the number a can be chosen arbitrarily large.

Solution 4. Note that the function $f: (1, \infty) \rightarrow \mathbb{R}$, $f(x) = x + x^{-1}$, is strictly increasing (it can be easily shown by derivative) and achieves all values of $(2, \infty)$. Hence let us have an arbitrary integer $c > 2$ where $c = \lambda + \lambda^{-1}$ for some real $\lambda > 1$.

Define

$$a = \frac{\lambda^{2012} - \lambda^{-2012}}{\lambda - \lambda^{-1}}, \quad b = \frac{-\lambda^{2011} + \lambda^{-2011}}{\lambda - \lambda^{-1}}.$$

Then it is easy to verify that λ and λ^{-1} are solutions of $x^{2012} = ax + b$.

Note that a and b are integers. Indeed: for any positive integer k , we have

$$\lambda^k - (\lambda^{-1})^k = (\lambda - \lambda^{-1}) \cdot \left(\lambda^{k-1} + \lambda^{k-2} \cdot \lambda^{-1} + \dots + \lambda \cdot (\lambda^{-1})^{k-2} + (\lambda^{-1})^{k-1} \right),$$

where the rightmost factor is a symmetric polynomial with integral coefficients in two variables and therefore can be expressed as a polynomial with integral coefficients in symmetric fundamental polynomials $\lambda + \lambda^{-1}$ and $\lambda \cdot \lambda^{-1} = 1$, hence is an integer.

If there were only a finite number of integer pairs (a, b) for which $x^{2012} - ax - b$ has two distinct roots whose product is 1, the number of all such roots would also be finite. This would be a contradiction since by the construction above, there are infinitely many such numbers λ for which $\lambda + \lambda^{-1} \in \{3, 4, \dots\}$ and that λ, λ^{-1} are roots of some $x^{2012} - ax - b$ where a, b are integers.

Problem 5 –EST–

Find all functions $f: \mathbb{R} \rightarrow \mathbb{R}$ for which

$$f(x + y) = f(x - y) + f(f(1 - xy))$$

holds for all real numbers x and y .

Answer: $f(x) \equiv 0$.

Solution. Substituting $y = 0$ gives $f(x) = f(x) + f(f(1))$, hence $f(f(1)) = 0$. Using this after substituting $x = 0$ into the original equation gives $f(y) = f(-y)$ for all y , i.e., f is even.

Substituting $x = 1$ into the original equation gives $f(1 + y) = f(1 - y) + f(f(1 - y))$. By f being even, also $f(-1 - y) = f(1 - y) + f(f(1 - y))$. Hence $f(f(1 - y)) = f(1 - y - 2) - f(1 - y)$. As $1 - y$ covers all real values, one can conclude that

$$f(f(z)) = f(z - 2) - f(z) \quad (4)$$

for all real numbers z .

Substituting $-z$ for z into (4) and simplifying the terms by using that f is even, one obtains $f(f(z)) = f(z + 2) - f(z)$. Together with (4), this implies

$$f(z + 2) = f(z - 2) \quad (5)$$

for all real numbers z .

Now taking $y = 2$ in the original equation followed by applying (5) leads to $f(f(1 - 2x)) = 0$ for all real x . As $1 - 2x$ covers all real values, one can conclude that

$$f(f(z)) = 0 \quad (6)$$

for all real numbers z . Thus the original equation reduces to

$$f(x + y) = f(x - y).$$

Taking $x = y$ here gives $f(2x) = f(0)$, i.e., f is constant, as $2x$ covers all real numbers. As 0 must be among the values of f by (6), $f(x) \equiv 0$ is the only possibility.

Problem 6 –SPB–

There are 2012 lamps arranged on a table. Two persons play the following game. In each move the player flips the switch of one lamp, but he must never get back an arrangement of the lit lamps that has already been on the table. A player who cannot move loses. Which player has a winning strategy?

Answer: the first player has a winning strategy.

Solution 1. The first player can pick one lamp and keep switching it on and off during the whole game. The second player cannot switch this particular lamp, he always has to switch some other lamp so that the arrangement of the other lamps becomes different from any that has already been on the table. So the first player always has a move, and the second player eventually runs out of the possible moves.

Solution 2. Note that the parity of the lit lamps changes with each move. So all the possible states can be divided into two disjoint sets, one with odd number of the lamps lit and the other with even number of the lamps lit. We get a bipartite graph where the vertices are the states and two states are connected with an edge if it is possible to get from one state to another by switching one lamp off or on.

We want to use Hall's marriage theorem to get a perfect matching of the states. The assumption of the theorem is the following: for every subset A of the states in one set there is at least as many neighboring states in the second set. Let the number of states in A be n , and let B be the set of neighboring states of A , containing m states. Since each state in A has exactly 2012 neighbors and all these neighbors belong to the set B , there are exactly $2012n$ edges between A and B . Since each state in B has exactly 2012 neighbors (some of them may not belong to A), there is at most $2012m$ edges between A and B . Hence $2012n \leq 2012m$, or $n \leq m$, i.e. the assumption of the theorem is satisfied.

Now the Hall's theorem states that there is a perfect matching. On every move the first player has to switch the lamp which changes the state into its partner in the perfect matching. Any lamp the second player can switch results in a state whose partner has not been used yet, so the first player always has a move, and the second player eventually loses.

Problem 7 –SPB–

On a 2012×2012 board, some cells on the top-right to bottom-left diagonal are marked. None of the marked cells is in a corner. Integers are written in each cell of this board in the following way. All the numbers in the cells along the upper and the left sides of the board are 1's. All the numbers in the marked cells are 0's. Each of the other cells contains a number that is equal to the sum of its upper neighbour and its left neighbour. Prove that the number in the bottom right corner is not divisible by 2011.

Solution 1. Let a peg go on the board, stepping from a cell to the neighbor cell right or below. Then the number in the bottom right corner of the board is equal to the number of paths of the peg from the top left corner to the bottom right corner, which do not visit the marked cells.

The total number of paths (including those that pass through the marked cells) equals $\binom{4022}{2011}$; this number is not divisible by 2011, because 2011 is a prime number. The number of paths that pass through the k -th cell of the diagonal equals $\binom{2011}{k}^2$, because in order to visit this cell starting from the corner the peg should make 2011 steps, k of which are horizontal, and others are vertical; and after the visit it also should make 2011 steps, k of which is vertical. Since $k \neq 0$, 2011 (because the marked cells are not in the corner) this number is divisible by 2011.

So the number in the low right corner equals the difference of the number that is not divisible by 2011 and several numbers that are divisible by 2011.

Solution 2. Turning the board 45° so that the upper left corner is on the top we notice that the numbers written on the board constitute the Pascal's triangle. If there were no marked cells on the board, then the number on the bottom cell

would be $\binom{4022}{2011}$, which is not divisible by 2011. All the cells on the diagonal that is now horizontal, would be of the form $\binom{2011}{k}$; all of them, except the numbers in the corners, would be divisible by 2011. If we substitute the numbers on the diagonal with their remainders modulo 2011, then all the numbers on the diagonal are 0's, independent of whether they were marked or not, except in the corners there are 1's. After this change all numbers below the diagonal get substituted with their remainders modulo 2011. All the numbers below the diagonal are now 0's, except along the sides are 1's and in the bottom corner there is 2. Hence the remainder of the number written in the bottom corner modulo 2012 is 2.

Problem 8 –SPB–

A directed graph does not contain directed cycles. The number of edges in any directed path does not exceed 99. Prove that it is possible to colour the edges of the graph in 2 colours so that the number of edges in any single-coloured directed path in the graph will not exceed 9.

Solution. Label each vertex by the number from 0 to 99, that is equal to the length of the longest directed path that ends in this vertex. Then every edge goes from a vertex with a smaller label to a vertex with a larger label. Now colour this edge in red if the digit of tens in the larger label is greater than the digit of tens in the smaller label. Otherwise colour this edge in blue. Since the number of tens is the same in all vertices on a blue path, the length of the path cannot exceed 9. Since the number of tens is different in all vertices on a red path, the length of the path also cannot exceed 9.

Problem 9 –DEN–

Zeros are written in all cells of a 5×5 board. We can take an arbitrary cell and increase by 1 the number in this cell and all cells having a common side with it. Is it possible to obtain the number 2012 in all cells simultaneously?

Answer: No.

Solution 1. Let $a_{(i,j)}$ be the number written in the cell in the row i and column j . To prove that it is not possible to get 2012 written in each cell, we choose a factor $c_{(i,j)}$ for each cell, such that

$$S = \sum_{1 \leq i, j \leq 5} c_{(i,j)} \cdot a_{(i,j)}$$

increases by the same number each time a cell is chosen. If we choose the factors $c_{(i,j)}$ as shown in Figure 1, then S increases by 22 each time a cell is chosen. Hence S is divisible by 22 at all times. The sum of all the $c_{(i,j)}$ is 138, hence if 2012 is written in each cell, then

$$S = 138 \cdot 2012 = 2^3 \cdot 3 \cdot 23 \cdot 503,$$

which cannot be reached, since it is not divisible by 22.

Solution 2. Divide all cells into six disjoint sets as follows: the set A consists of all corner cells, the set B consists of all cells, having a common side with the corner cells, the set C consists of all diagonal neighbors of the corner cells, the set D consists of all middle cells of the sides of the board, the set E consists of all cells having a common side with the center cell, and the set F has only the center cell in it. Suppose we choose a times a cell from the set A , b times from the set B etc. Suppose that after a number of steps we get the number s written in each cell. Since only the cells from the sets A and B contribute to the numbers written in the cells of the set A and each choice from these sets contributes exactly 1 to the sum of the numbers written in the cells of the set A , we have $a + b = 4s$. Similarly, considering the sum of the numbers written in the cells of the set B , we see that choosing a cell from the set A contributes 2 to the sum, choosing a cell from the set B contributes 1, a cell from C contributes 2 and a cell from D contributes 2, hence $2a + b + 2c + 2d = 8s$. Continuing, we get $b + c + 2e = 4s$, $b + d + e = 4s$, $2c + d + e + 4f = 4s$, and $e + f = s$. Eliminating a , b , d , e , and f from these equations we get $11c = 4s$. This is only possible if s is divisible by 11. Since 2012 is not divisible by 11, it is not possible to get 2012 written in each cell.

Remark. For every positive s divisible by 11 it is possible to get s written in each cell. For $s = 11$ Figure 2 shows how many times one has to choose each cell. If s is larger than 11, we can simply repeat these steps as many times as needed. The same figure can also be used for choosing factors as in Solution 1.

Problem 10 **–DEN–**

Two players A and B play the following game. Before the game starts, A chooses 1000 not necessarily different odd primes, and then B chooses half of them and writes them on a blackboard. In each turn a player chooses a positive integer n , erases some primes p_1, p_2, \dots, p_n from the blackboard and writes all the prime factors of $p_1 p_2 \dots p_n - 2$ instead (if a prime occurs several times in the prime factorization of $p_1 p_2 \dots p_n - 2$, it is written as many times as it occurs). Player A starts, and the player whose move leaves the blackboard empty loses the game. Prove that one of the two players has a winning strategy and determine who.

Remark: Since 1 has no prime factors, erasing a single 3 is a legal move.

Solution. Player A has a winning strategy.




Figure 1




Figure 2

Let player A choose 1000 primes all congruent to 1 modulo 4. Then there are 500 primes congruent to 1 modulo 4 when the game begins. Let P denote the parity of the number of primes congruent to 3 modulo 4 on the blackboard. When the game starts, P is even. Remember that the number of primes congruent to 3 modulo 4 in the prime factorization of a number is even if the number is congruent to 1 modulo 4, and odd if the number is congruent to 3 modulo 4. In each turn the parity of P changes, because the number of primes congruent to 3 modulo 4 among p_1, p_2, \dots, p_n and in the prime factorization of $p_1 p_2 \dots p_n - 2$ is of different parity. Hence P is odd after each of A 's turns and even after each of B 's turns, so A cannot lose. Since the product of all the primes on the blackboard decreases with each turn, the game eventually ends, hence A wins.

Problem 11 **–SPB–**

Let ABC be a triangle with $\angle A = 60^\circ$. The point T lies inside the triangle in such a way that $\angle ATB = \angle BTC = \angle CTA = 120^\circ$. Let M be the midpoint of BC . Prove that $TA + TB + TC = 2AM$.

Solution 1. Rotate the triangle ABC by 60° around the point A (Figure 3). Let T' and C' be the images of T and C , respectively. Then the triangle ATT' is equilateral and $\angle AT'C' = 120^\circ$, meaning that B, T, T', C' are collinear and $TA + TB + TC = BC'$. Let A' be a point such that $ABA'C$ is a parallelogram. Then $2AM = AA'$. It remains to observe that the triangles BAC' and ABA' are equal, since BA is common, $\angle BAC' = 120^\circ = \angle A'BA$, and $AC' = BA'$.

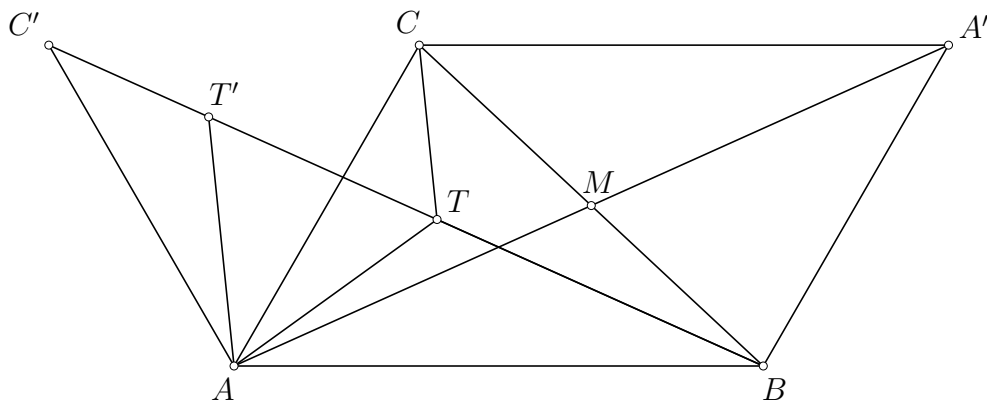


Figure 3

Remark. The rotation used here is the same as that used in finding a point P in the triangle such that the total distance from the three vertices of the triangle to P is the minimum possible (Fermat point); this is exactly the point T in the problem.

Solution 2. Let A' be a point such that $ABA'C$ is a parallelogram. Since $\angle BA'C = 60^\circ$ and $\angle BTC = 120^\circ$, the point T lies on the circumcircle of $A'BC$. Let X be the second intersection point of AT with this circumcircle and let Y be the midpoint of $A'X$. The triangle BCX is equilateral, since $\angle BXC = \angle BA'C = 60^\circ$ and $\angle BCX = \angle BTX = 180^\circ - \angle BTA = 60^\circ$. Therefore $TB + TC = TX$. So it is sufficient to show that $AX = AA'$.

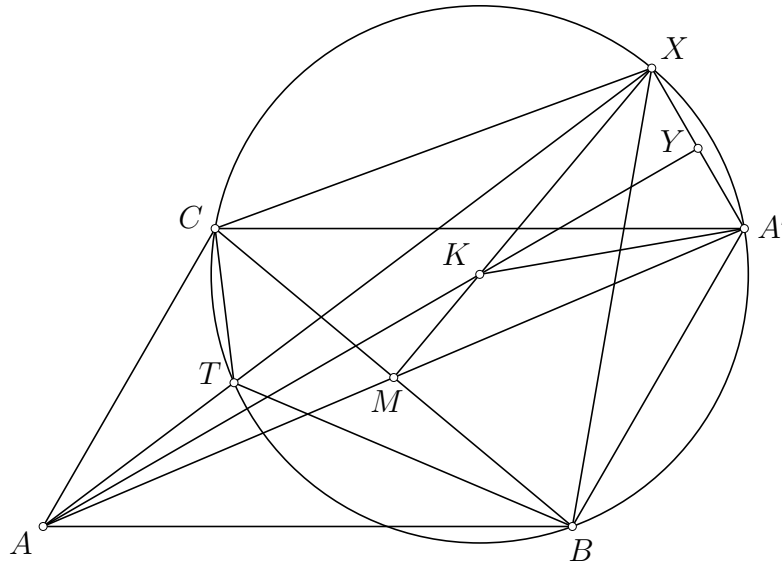


Figure 4

Let K be the intersection point of the medians of BCX . Since XM is a median for both BCX and $AA'X$, it follows that K is also the intersection point of the medians of $AA'X$. Thus K lies on the median AY . Since the triangle $KA'X$ is equilateral, we have $KY \perp A'X$, so AY is both the height and the median of $AA'X$.

Consequently, $TA + TB + TC = AX = AA' = 2AM$.

Solution 3. Let A' be a point such that $ABA'C$ is a parallelogram (Figure 5). Use notations $AB = c$, $AC = b$, $2AM = AA' = d$, $TA = x$, $TB = y$, $TC = z$. From $\angle ABT = 60^\circ - \angle BAT = \angle CAT = 60^\circ - \angle ACT$ one gets $\triangle ABT \sim \triangle CAT$. So $y : x = c : b$, and we have totally $\triangle ABT \sim \triangle CAT \sim \triangle A'AB$, giving $x = b \cdot \frac{c}{d} = c \cdot \frac{b}{d}$, $y = c \cdot \frac{c}{d}$, $z = b \cdot \frac{b}{d}$. By applying the law of cosines in triangle $A'AB$, we finally get

$$x + y + z = \frac{bc + c^2 + b^2}{d} = \frac{d^2}{d} = d.$$

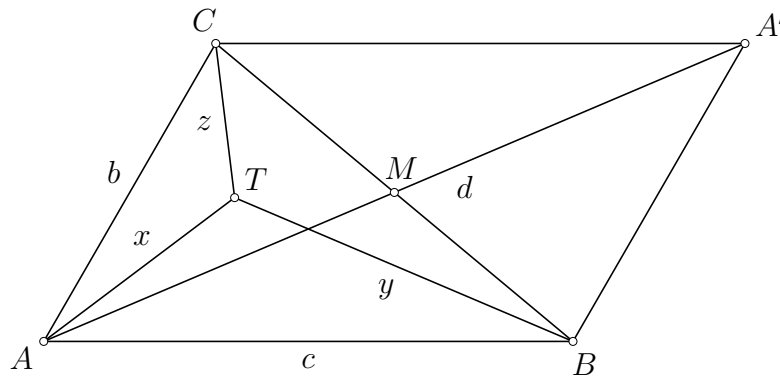


Figure 5

Problem 12 –DEN–

Let $P_0, P_1, \dots, P_8 = P_0$ be successive points on a circle and Q be a point inside the polygon $P_0P_1\dots P_7$ such that $\angle P_{i-1}QP_i = 45^\circ$ for $i = 1, \dots, 8$. Prove that the sum

$$\sum_{i=1}^8 P_{i-1}P_i^2$$

is minimal if and only if Q is the centre of the circle.

Solution. By the cosine law we have (Figure 6)

$$P_{i-1}P_i^2 = QP_{i-1}^2 + QP_i^2 - \sqrt{2} \cdot QP_{i-1} \cdot QP_i.$$

Hence, using the AM-GM inequality,

$$\sum_{i=1}^8 P_{i-1}P_i^2 = \sum_{i=1}^8 (2 \cdot QP_i^2 - \sqrt{2} \cdot QP_{i-1} \cdot QP_i) \geq (2 - \sqrt{2}) \sum_{i=1}^8 QP_i^2.$$

The equality holds if and only if all distances QP_i are equally large, i.e. Q is the centre of the circle. So it remains to show that the sum in the last expression is independent of Q . Indeed, by the Pythagorean theorem,

$$\sum_{i=1}^8 QP_i^2 = (P_0P_2^2 + P_4P_6^2) + (P_1P_3^2 + P_5P_7^2) = 2d^2,$$

where d is the diameter of the circle. The last equality follows from the fact that $P_0P_2P_4P_6$ is a cyclic quadrilateral with perpendicular diagonals, so $P_0P_2^2 + P_4P_6^2 = d^2$.

Remark. The sum $\sum_{i=1}^8 QP_i^2 = \sum_{i=1}^4 QP_{2i-1}^2 + \sum_{i=1}^4 QP_{2i}^2$ can also be computed easily using coordinates, e.g. expressing each term by the coordinates of Q .

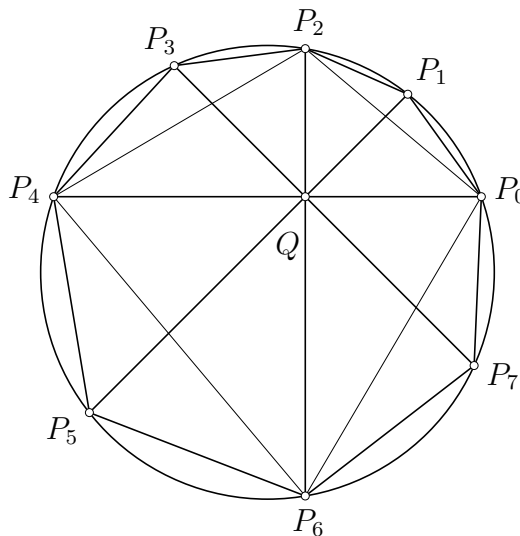


Figure 6

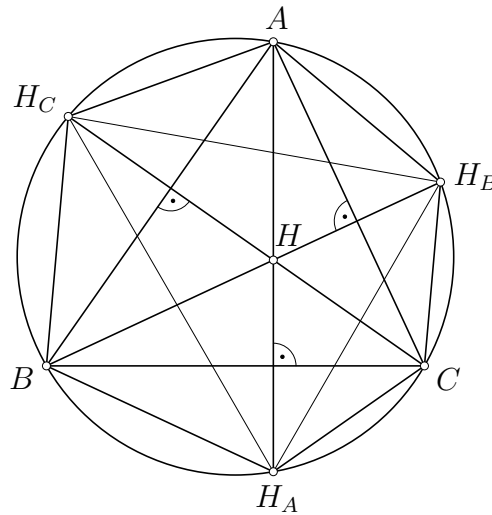


Figure 7

Problem 13 **–NOR–**

Let ABC be an acute triangle, and let H be its orthocentre. Denote by H_A , H_B and H_C the second intersection of the circumcircle with the altitudes from A , B and C respectively. Prove that the area of $\triangle H_A H_B H_C$ does not exceed the area of $\triangle ABC$.

Solution 1. We know that the points H_A , H_B and H_C are in fact the reflection of H on the sides (Figure 7). Since ABC is acute (i.e. H lies in the interior of ABC), we have $S_{AH_C B H_A C H_B} = 2S_{ABC}$. We thus have to show that $2S_{H_A H_B H_C} \leq S_{AH_C B H_A C H_B}$, which is equivalent to

$$S_{H_A H_B H_C} \leq S_{H_A C H_B} + S_{H_B A H_C} + S_{H_C B H_A}.$$

Notice that the triangles on the RHS are isosceles (e.g. $H_A C = H C = H_B C$). If now for example $\angle H_A H_B H_C \geq 90^\circ$, then obviously already $S_{H_A H_B H_C} \leq S_{H_A B H_C}$. It may therefore be supposed that $H_A H_B H_C$ is acute-angled. Denote by M its orthocentre, which then lies inside the triangle. Denote by M_A , M_B and M_C the reflections of the orthocentre on the sides $H_B H_C$, $H_C H_A$ and $H_A H_B$, respectively. These lie on the circumcircle, and therefore we have $S_{H_B M_A H_C} \leq S_{H_B A H_C}$, $S_{H_C M_B H_A} \leq S_{H_C B H_A}$ and $S_{H_A M_C H_B} \leq S_{H_A C H_B}$. Since

$$S_{H_A H_B H_C} = S_{H_B M_A H_C} + S_{H_C M_B H_A} + S_{H_A M_C H_B},$$

we arrive to the required result.

Solution 2. Let the angles of ABC be denoted by α , β and γ , the radius of the circumcircle by R . Then

$$S_{ABC} = 2R^2 \sin \alpha \sin \beta \sin \gamma.$$

By peripheric angles we get

$$\angle H_A H_B H_C = \angle H_A H_B B + \angle B H_B H_C = \angle H_A A B + \angle B C H_C = 180^\circ - 2\beta,$$

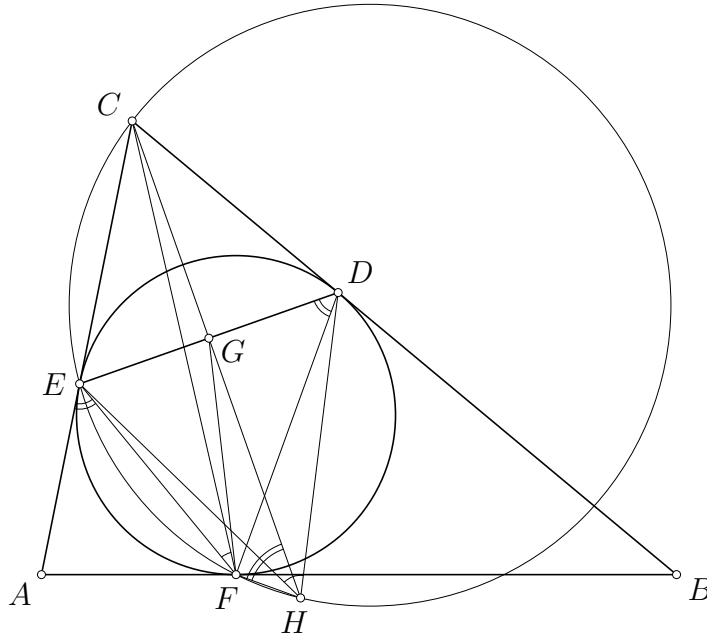


Figure 8

and correspondingly $\angle H_B H_C H_A = 180^\circ - 2\gamma$ and $\angle H_C H_A H_B = 180^\circ - 2\alpha$. Thus

$$\begin{aligned} S_{H_A H_B H_C} &= 2R^2 \sin(180^\circ - 2\beta) \sin(180^\circ - 2\gamma) \sin(180^\circ - 2\alpha) \\ &= 2R^2 \sin(2\beta) \sin(2\gamma) \sin(2\alpha) = 8S_{ABC} \cos \alpha \cos \beta \cos \gamma \\ &\leq 8S_{ABC} \left(\frac{\cos \alpha + \cos \beta + \cos \gamma}{3} \right)^3 \leq S_{ABC}, \end{aligned}$$

where the last inequality follows from Jensen's inequality for the cosine function.

Remark. There are also other solutions that combine the ideas appearing in Solutions 1 and 2 in different way.

Problem 14 **–POL–**

Given a triangle ABC , let its incircle touch the sides BC , CA , AB at D , E , F , respectively. Let G be the midpoint of the segment DE . Prove that $\angle EFC = \angle GFD$.

Solution 1. Let ω be the circumcircle of the triangle CEF and let H be the second point of intersection of the circle ω with the line CG (Figure 8). Assume also, without loss of generality, that $AC < BC$. (If $AC = BC$, the whole problem becomes trivial due to symmetry.) Then the points G , H , B lie on the same side of the line CF and the vertex A lies on the opposite side. The points E , F , H , C lie on the circle ω while the points E and D are symmetric with respect to the line CH . Hence

$$\angle EFC = \angle EHC = \angle CHD. \tag{*}$$

The line AC is tangent to the incircle of ABC at E , so we have $\angle GDF = \angle EDF = \angle AEF = 180^\circ - \angle CEF$. Now, using the circle ω , we see that $\angle CEF =$

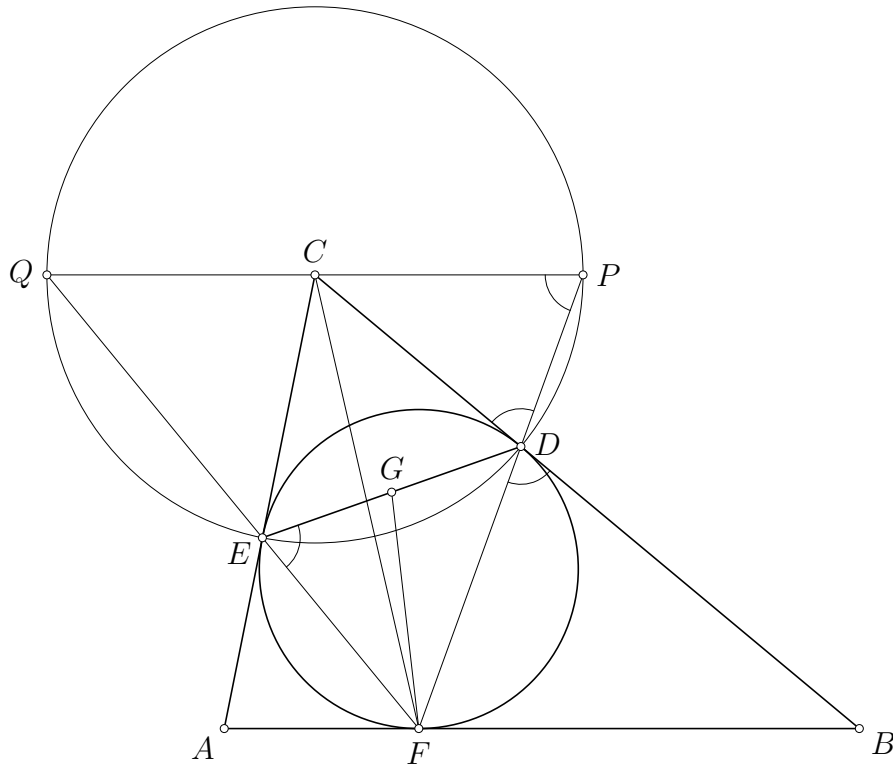


Figure 9

$180^\circ - \angle CHF = 180^\circ - \angle GHF$. Combining the above relations we conclude that $\angle GDF = \angle GHF$, so that the points G, F, H, D lie on a circle. Therefore $\angle CHD = \angle GHD = \angle GFD$, which together with (*) proves the assertion of the problem.

Remark. This problem is trivial for those who rely on the following known result: a symmedian through one of the vertices of a triangle passes through the point of intersection of the tangents to the circumcircle at the other two vertices (<http://www.cut-the-knot.org/Curriculum/Geometry/Symmedian.shtml#explanation>). Applying this result to triangle DEF and the symmedian through F gives that the symmedian coincides with FC . Now use the definition of symmedian.

Solution 2. We show that the ray from a triangle vertex F through the intersection C of the tangents to the circumcircle at the two other vertices D and E is the symmedian of triangle DFE : Let the circle with centre C and radius $CD = CE$ meet the rays FD and FE again in P and Q (Figure 9). Then

$$\angle DPC = \angle PDC = \angle FDB = \angle FED = 180^\circ - \angle QED = \angle QPD,$$

whence P, C, Q are collinear. Thus PQ is a diameter of circle $DEQP$. Triangles FDE and FQP are similar and have a common angle at F . Consequently, the desired result follows since G is the midpoint of DE and C is the midpoint of PQ .

Problem 15 –LAT–

The circumcentre O of a given cyclic quadrilateral $ABCD$ lies inside the quadrilateral but not on the diagonal AC . The diagonals of the quadrilateral intersect at I .

The circumcircle of the triangle AOI meets the sides AD and AB at points P and Q , respectively; the circumcircle of the triangle COI meets the sides CB and CD at points R and S , respectively. Prove that $PQRS$ is a parallelogram.

Solution. Assume w.l.o.g. that angle ABC is obtuse (otherwise switch B and D , Figure 10). As A, I, O and P are concyclic, we get $\angle QAI = \angle QOI$; similarly $\angle RCI = \angle ROI$. Hence

$$\begin{aligned} \angle QOR &= \angle QOI + \angle ROI = \angle QAI + \angle RCI = \angle BAC + \angle BCA \\ &= 180^\circ - \angle ABC = 180^\circ - \angle QBR. \end{aligned}$$

It follows that points Q, O, R and B are concyclic.

Furthermore, $\angle PAI = 180^\circ - \angle POI$ and $\angle SCI = 180^\circ - \angle SOI$ imply

$$\begin{aligned} \angle POS &= 360^\circ - \angle POI - \angle SOI = \angle PAI + \angle SCI = \angle DAC + \angle DCA \\ &= 180^\circ - \angle ADC = 180^\circ - \angle PDS. \end{aligned}$$

Hence also points P, O, S and D are concyclic.

As O is the circumcentre of $ABCD$, we have $AO = OB$ and $\angle BAO = \angle OBA$. These are inscribed angles in circumcircles of APQ and BQR , respectively, and both of them are based on the same chord OQ . Therefore the radii of these two circumcircles are equal. Similarly, the radii of circumcircles of BQR, CRS and DSP are also equal.

As $\angle QAP = \angle BAD = 180^\circ - \angle BCD = 180^\circ - \angle RCS$ and radii of the circumcircles of $AQOP$ and $ORCS$ are equal, the chords QP and RS have equal lengths; similarly also QR and PS have equal lengths. Thus $PQRS$ is a parallelogram.

Remark. In the case of O lying in the diagonal AC , the necessary triangles AOI and COI are degenerate and have no circumcircle. The statement of the problem still holds if the circumcentre of $ABCD$ does not lie inside the quadrilateral (Figure 11) and even if the circumcircles of AOI and COI meet prolongations of sides.

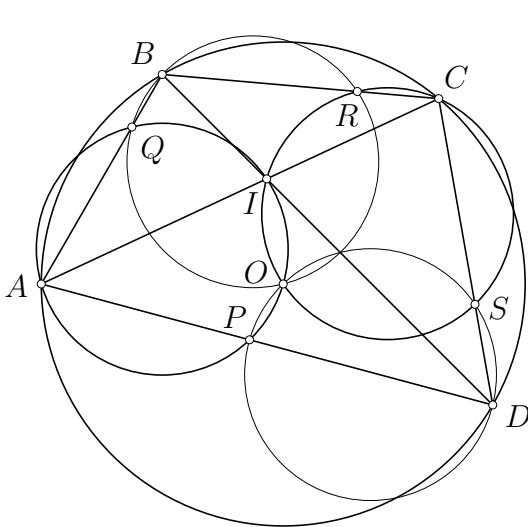


Figure 10

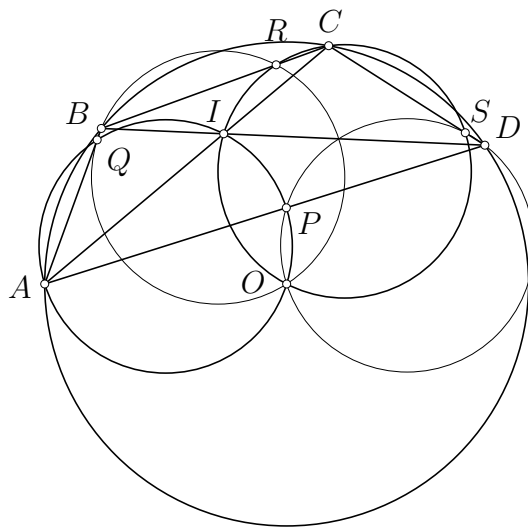


Figure 11

Problem 16 –FIN–

Let n , m and k be positive integers satisfying $(n-1)n(n+1) = m^k$. Prove that $k = 1$.

Solution. Since $\gcd(n, (n-1)(n+1)) = 1$, if $(n-1)n(n+1)$ is a k -th power for $k \geq 1$, then n and $(n-1)(n+1) = n^2 - 1$ must be k -th powers as well. Then $n = m_1^k$ and $n^2 - 1 = m_2^k = (m_1^2)^k - 1$. But the difference of two positive k -th powers can never be 1, if $k > 1$. So $k = 1$.

Problem 17 –DEN–

Let $d(n)$ denote the number of positive divisors of n . Find all triples (n, k, p) , where n and k are positive integers and p is a prime number, such that

$$n^{d(n)} - 1 = p^k.$$

Solution. Note first that $n^{d(n)}$ is always a square: if $d(n)$ is an even number this is clear; but $d(n)$ is odd exactly if n is a square, and then its power $n^{d(n)}$ is also a square.

Let $n^{d(n)} = m^2$, $m > 0$. Then

$$(m+1)(m-1) = m^2 - 1 = n^{d(n)} - 1 = p^k.$$

There is no solution for $m = 1$. If $m = 2$, we get $(n, k, p) = (2, 1, 3)$. If $m > 2$, we have $m-1, m+1 > 1$ and because both factors divide p^k , they are both powers of p . The only possibility is $m-1 = 2, m+1 = 4$. Hence $m = 3$ and $n^{d(n)} = m^2 = 9$. This leads to the solution $(n, k, p) = (3, 3, 2)$. So the only solutions are $(n, k, p) = (2, 1, 3)$ and $(n, k, p) = (3, 3, 2)$.

Problem 18 –NOR–

Find all triples (a, b, c) of integers satisfying $a^2 + b^2 + c^2 = 20122012$.

Solution. First consider the equation modulo 4. Since a square can only be congruent to 0 or 1 modulo 4, and 20122012 is divisible by 4, we can conclude that all of a, b and c have to be even. Substituting $a = 2a_1, b = 2b_1, c = 2c_1$ the equation turns into $a_1^2 + b_1^2 + c_1^2 = 5030503$.

If we now consider the remaining equation modulo 8, we can see that the right side is congruent to 7, whilst the only quadratic residues modulo 8 are 0, 1 and 4, and hence the left hand side can never be congruent to 7.

We therefore conclude that the original equation has no integer solutions.

Problem 19 –POL–

Show that $n^n + (n+1)^{n+1}$ is composite for infinitely many positive integers n .

Solution. We will show that for any positive integer $n \equiv 4 \pmod{6}$ the number $n^n + (n+1)^{n+1}$ is divisible by 3 and hence composite. Indeed, for any such n we have $n \equiv 1 \pmod{3}$ and hence $n^n + (n+1)^{n+1} \equiv 1^n + 2^{n+1} = 1 + 2^{n+1} \pmod{3}$. Moreover, the exponent $n+1$ is odd, which implies that $2^{n+1} \equiv 2 \pmod{3}$. It follows that $n^n + (n+1)^{n+1} \equiv 1 + 2 \equiv 0 \pmod{3}$, as claimed.

Problem 20 –LAT–

Find all integer solutions of the equation $2x^6 + y^7 = 11$.

Solution. There are no solutions. The hardest part of the problem is to determine a modulus m that would yield a contradiction. There should be few sixth and seventh powers modulo m , hence, a natural choice is $6 \cdot 7 + 1 = 43$. Luckily, it is a prime.

Now, just write out sixth powers (0, 1, 4, 11, 16, 21, 35, 41) and seventh powers (0, 1, 6, 7, 36, 37, 42) modulo 43, and see that they can't be combined to give 11. Indeed,

$$\begin{aligned} 2x^6 \pmod{43} &\in \{0, 2, 8, 22, 27, 32, 39, 42\}, \\ 11 - y^7 \pmod{43} &\in \{4, 5, 10, 11, 12, 17, 18\}, \end{aligned}$$

and these sets do not intersect.

Remark. To find the sixth and seventh powers modulo 43, we can note that 3 is a primitive root modulo 43. So the nonzero sixth powers are exactly the powers of $3^6 \equiv 41 \equiv -2$ and the nonzero seventh powers are the powers of $3^7 \equiv 37 \equiv -6 \pmod{43}$.